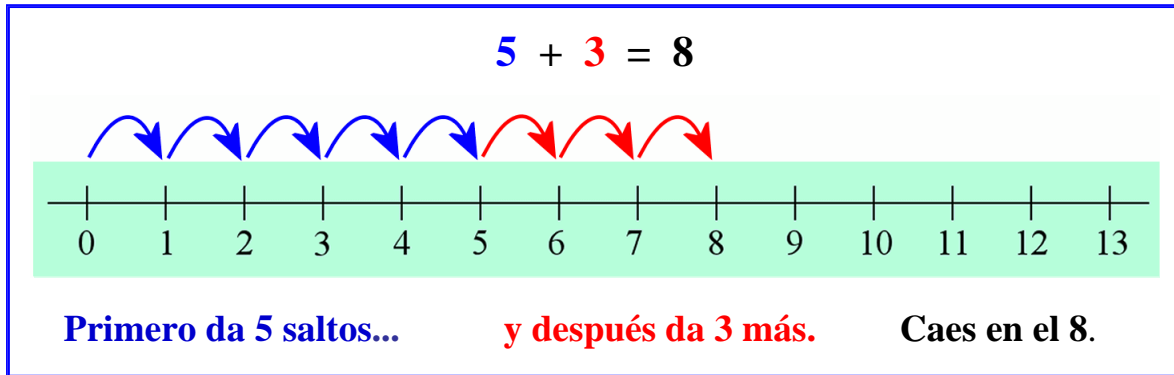
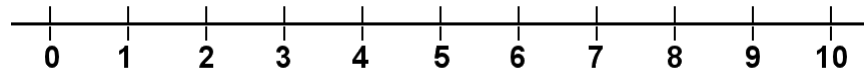


Sumar en la recta numérica

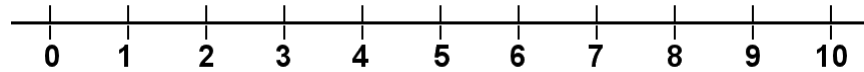


1. Dibuja los saltos para ilustrar la suma y resuélvela. Puedes utilizar un color diferente para cada número cuando dibujas los saltos.

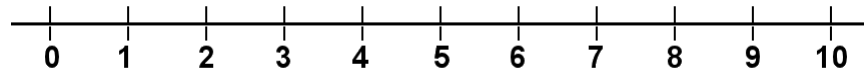
a. $5 + 2 =$ _____



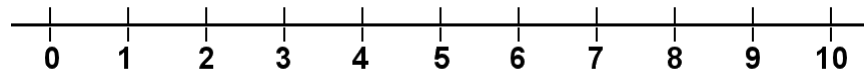
b. $4 + 1 =$ _____



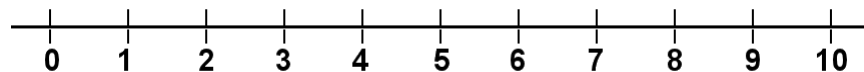
c. $6 + 3 =$ _____



d. $9 + 1 =$ _____



e. $7 + 3 =$ _____



f. $4 + 3 =$ _____

