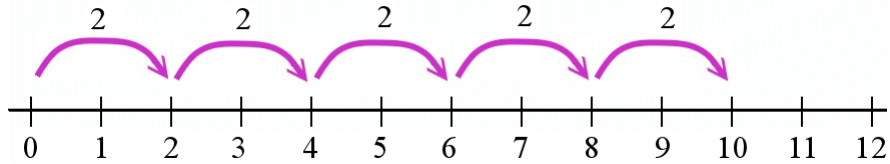


# Multiplicar en una recta numérica

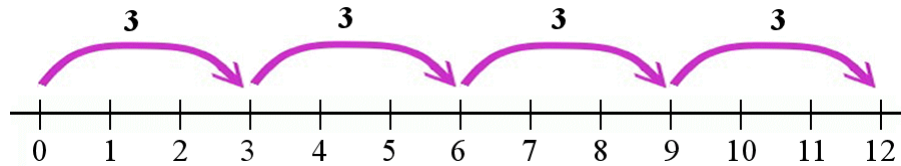
Cinco saltos, cada salto es dos pasos.

$$5 \times 2 = 10.$$

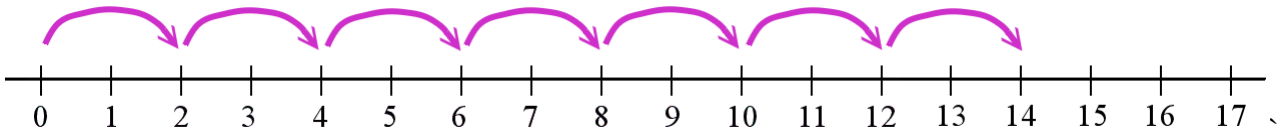


Cuatro saltos, cada salto es tres pasos.

$$4 \times 3 = 12.$$



1. Escribe las multiplicaciones que están representadas por los saltos en la recta numérica.



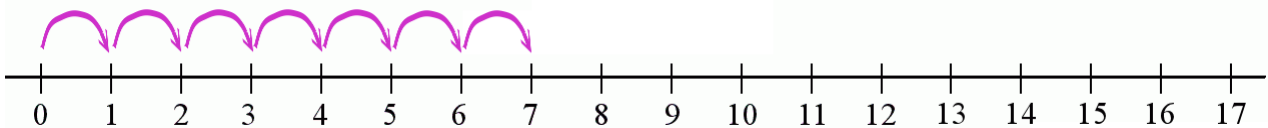
a.  $\underline{\quad} \times \underline{\quad} = \underline{\quad}$



b.  $\underline{\quad} \times \underline{\quad} = \underline{\quad}$



c.  $\underline{\quad} \times \underline{\quad} = \underline{\quad}$



d.  $\underline{\quad} \times \underline{\quad} = \underline{\quad}$