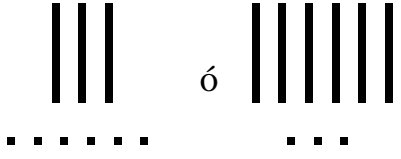






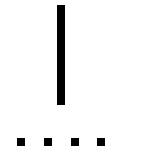










¿Qué número es mayor?

Encierre en un círculo el número mayor.

 <p>3 decenas 6 unidades = 36</p> <p>ó</p>  <p>6 decenas 3 unidades = 63</p>	 <p>5 decenas 4 unidades = 54</p> <p>ó</p>  <p>4 decenas 5 unidades = 45</p>
 <p>__ decena __ unidades = __</p> <p>ó</p>  <p>__ decenas __ unidades = __</p>	 <p>__ decenas __ unidades = __</p> <p>ó</p>  <p>__ decenas __ unidades = __</p>
 <p>__ decenas __ unidades = __</p> <p>ó</p>  <p>__ decenas __ unidades = __</p>	 <p>__ decenas __ unidades = __</p> <p>ó</p>  <p>__ decenas __ unidades = __</p>
 <p>__ decenas __ unidades = __</p> <p>ó</p>  <p>__ decenas __ unidades = __</p>	 <p>__ decenas __ unidades = __</p> <p>ó</p>  <p>__ decenas __ unidades = __</p>