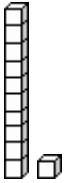
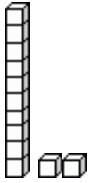
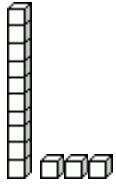
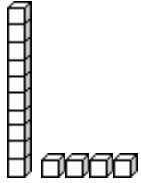
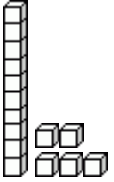
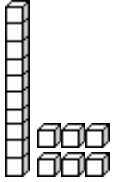
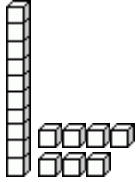
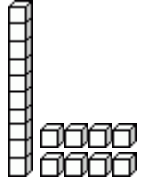
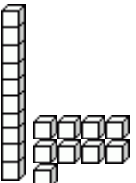
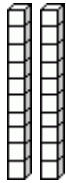
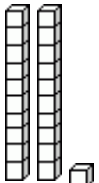
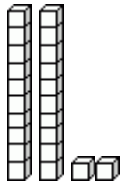
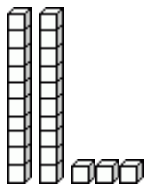


Construir los números 11-40

1. Completa la tabla. Piensa en el signo de “+” como “y”: $10 + 3$ quiere decir 10 y 3.

<p>a. Once</p>  <p>1 decena 1 unidad</p> <p>$10 + 1$</p> <p>dec. uni.</p> <table border="1" data-bbox="233 827 375 884"> <tr> <td>1</td> <td>1</td> </tr> </table>	1	1	<p>b. _____</p>  <p>1 decena 2 unidades</p> <p>$10 + 2$</p> <p>dec. uni.</p> <table border="1" data-bbox="574 842 711 905"> <tr> <td>1</td> <td>2</td> </tr> </table>	1	2	<p>c. Trece</p>  <p>1 decena ___ uni.</p> <p>$10 + 3$</p> <p>dec. uni.</p> <table border="1" data-bbox="911 835 1049 898"> <tr> <td>1</td> <td>3</td> </tr> </table>	1	3	<p>d. _____</p>  <p>1 decena ___ uni.</p> <p>$10 + \underline{\quad}$</p> <p>dec. uni.</p> <table border="1" data-bbox="1247 821 1386 884"> <tr> <td><input type="text"/></td> <td><input type="text"/></td> </tr> </table>	<input type="text"/>	<input type="text"/>
1	1										
1	2										
1	3										
<input type="text"/>	<input type="text"/>										
<p>e. _____</p>  <p>$10 + \underline{\quad}$</p> <p>dec. uni.</p> <table border="1" data-bbox="233 1352 375 1415"> <tr> <td><input type="text"/></td> <td><input type="text"/></td> </tr> </table>	<input type="text"/>	<input type="text"/>	<p>f. Dieciséis</p>  <p>$10 + \underline{\quad}$</p> <p>dec. uni.</p> <table border="1" data-bbox="574 1352 716 1415"> <tr> <td><input type="text"/></td> <td><input type="text"/></td> </tr> </table>	<input type="text"/>	<input type="text"/>	<p>g. _____</p>  <p>$\underline{\quad} + \underline{\quad}$</p> <p>dec. uni.</p> <table border="1" data-bbox="911 1352 1052 1415"> <tr> <td><input type="text"/></td> <td><input type="text"/></td> </tr> </table>	<input type="text"/>	<input type="text"/>	<p>h. _____</p>  <p>$\underline{\quad} + \underline{\quad}$</p> <p>dec. uni.</p> <table border="1" data-bbox="1247 1352 1386 1415"> <tr> <td><input type="text"/></td> <td><input type="text"/></td> </tr> </table>	<input type="text"/>	<input type="text"/>
<input type="text"/>	<input type="text"/>										
<input type="text"/>	<input type="text"/>										
<input type="text"/>	<input type="text"/>										
<input type="text"/>	<input type="text"/>										
<p>i. _____</p>  <p>$\underline{\quad} + \underline{\quad}$</p> <p>dec. uni.</p> <table border="1" data-bbox="233 1864 375 1927"> <tr> <td><input type="text"/></td> <td><input type="text"/></td> </tr> </table>	<input type="text"/>	<input type="text"/>	<p>j. Veinte</p>  <p>$20 + 0$</p> <p>dec. uni.</p> <table border="1" data-bbox="574 1871 711 1934"> <tr> <td>2</td> <td>0</td> </tr> </table>	2	0	<p>k. Veintiuno</p>  <p>$20 + \underline{\quad}$</p> <p>dec. uni.</p> <table border="1" data-bbox="911 1864 1052 1927"> <tr> <td><input type="text"/></td> <td><input type="text"/></td> </tr> </table>	<input type="text"/>	<input type="text"/>	<p>l. _____</p>  <p>$20 + \underline{\quad}$</p> <p>dec. uni.</p> <table border="1" data-bbox="1256 1864 1398 1927"> <tr> <td><input type="text"/></td> <td><input type="text"/></td> </tr> </table>	<input type="text"/>	<input type="text"/>
<input type="text"/>	<input type="text"/>										
2	0										
<input type="text"/>	<input type="text"/>										
<input type="text"/>	<input type="text"/>										

m. Veintitrés

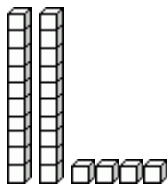


___ dec. ___ uni.

20 + ___

dec. uni.

n. _____

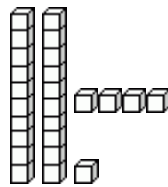


___ dec. ___ uni.

___ + ___

dec. uni.

o. _____

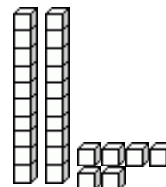


___ dec. ___ uni.

___ + ___

dec. uni.

p. _____

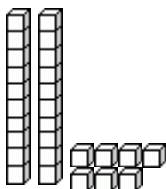


2 dec. ___ uni.

20 + ___

dec. uni.

q. Veintisiete

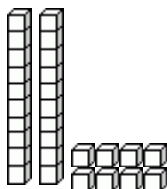


2 dec. ___ uni.

___ + ___

dec. uni.

r. _____

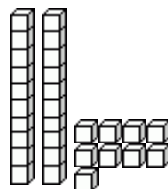


___ dec. ___ uni.

___ + ___

dec. uni.

s. _____

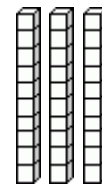


___ dec. ___ uni.

___ + ___

dec. uni.

t. Treinta

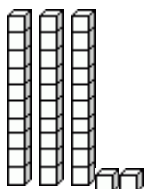


3 decenas 0 uni.

30 + 0

dec. uni.

u. Treinta y dos

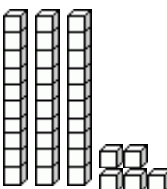


3 dec. ___ uni.

___ + ___

dec. uni.

v. _____

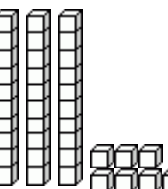


___ dec. ___ uni.

___ + ___

dec. uni.

w. _____

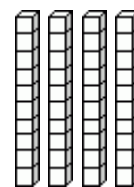


___ dec. ___ uni.

___ + ___

dec. uni.

x. Cuarenta



4 decenas 0 uni.

40 + 0

dec. uni.