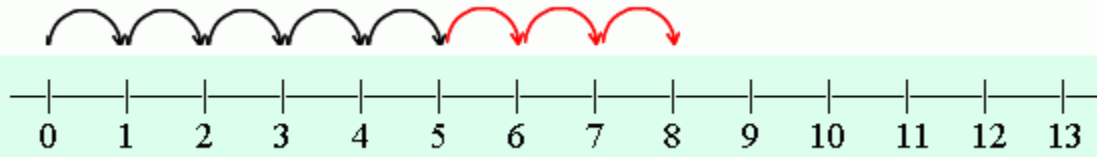


Sumar en una línea de números

$$5 + 3 = 8$$

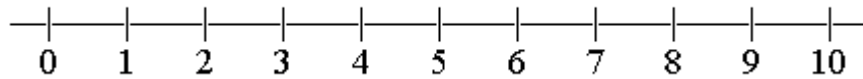


Primero salta 5...

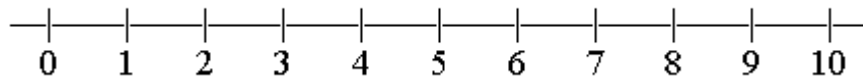
Después salta 3 más.

1. Dibuja saltos para ilustrar la suma y halla la respuesta.

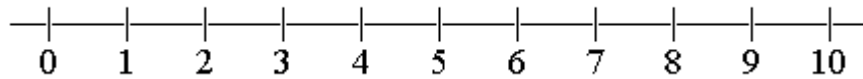
$5 + 2 = \underline{\quad}$



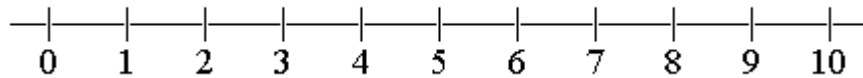
$4 + 1 = \underline{\quad}$



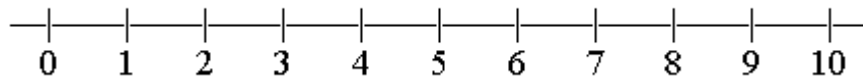
$6 + 3 = \underline{\quad}$



$9 + 1 = \underline{\quad}$



$7 + 3 = \underline{\quad}$



$4 + 3 = \underline{\quad}$

