

Resta hasta el diez

1. Escribe sumas de diez en la caja. Después, escribe pares de restas usando los mismos números.

10
1 + ___
4 + ___
3 + ___
5 + ___
0 + ___

a. $10 - 2 = \underline{\quad}$

b. $10 - 3 = \underline{\quad}$

$10 - \underline{8} = \underline{\quad}$

$10 - \underline{\quad} = \underline{\quad}$

c. $10 - 6 = \underline{\quad}$

d. $10 - 9 = \underline{\quad}$


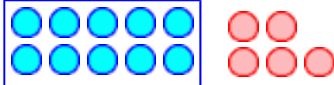

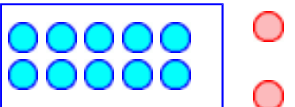
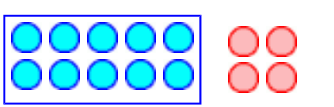
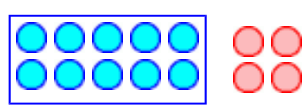
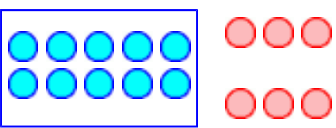
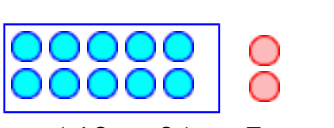
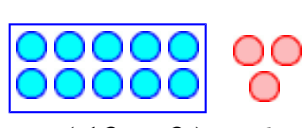
$10 - \underline{\quad} = \underline{\quad}$

$10 - \underline{\quad} = \underline{\quad}$

2. Resta hasta la decena completa anterior.

<p>a. $12 - \underline{2} = 10$</p> <p>$14 - \underline{\quad} = 10$</p> <p>$17 - \underline{\quad} = 10$</p> <p>$15 - \underline{\quad} = 10$</p>	<p>b. $26 - \underline{\quad} = 20$</p> <p>$37 - \underline{\quad} = 30$</p> <p>$22 - \underline{\quad} = 20$</p> <p>$51 - \underline{\quad} = 50$</p>	<p>c. $19 - \underline{\quad} = 10$</p> <p>$64 - \underline{\quad} = 60$</p> <p>$51 - \underline{\quad} = 50$</p> <p>$18 - \underline{\quad} = 10$</p>
--	--	--

3. Primero resta las pelotas que están afuera de la decena en la caja, entonces resta más.

 <p>a. $(13 - 3) - 2 =$</p>	 <p>b. $(15 - 5) - 3 =$</p>	 <p>c. $(14 - 4) - 2 =$</p>
 <p>d. $(12 - 2) - 4 =$</p>	 <p>e. $(14 - 4) - 5 =$</p>	 <p>f. $(15 - 5) - 3 =$</p>
 <p>g. $(16 - 6) - 2 =$</p>	 <p>h. $(12 - 2) - 7 =$</p>	 <p>i. $(13 - 3) - 6 =$</p>